





**NORTHLANDS & SUNFIELD CITY SCHOOL**  
**Mathematics Grade 2**  
**Revision exercises on covered chapters Week 12**  
**Prepared by Miss Mehreen**

1. Write the name of the following shapes.




2. Colour the **bigger** bird yellow.



3. Colour the **smaller** rectangle red.

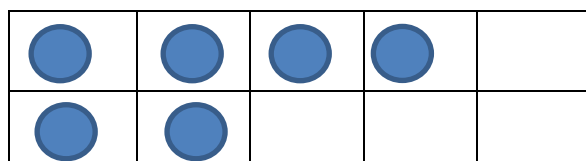


4. Draw the missing number of bottle tops and write the correct numeral.



3 and   make 10.

b.



6 and   make 10.

5. Draw the correct number of bottle tops.

(a) 1 ten and 6 units

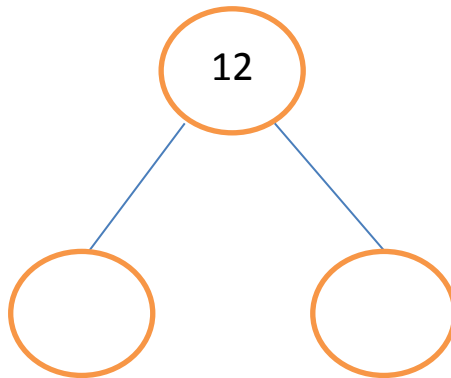


(b) 1 ten and 1 unit

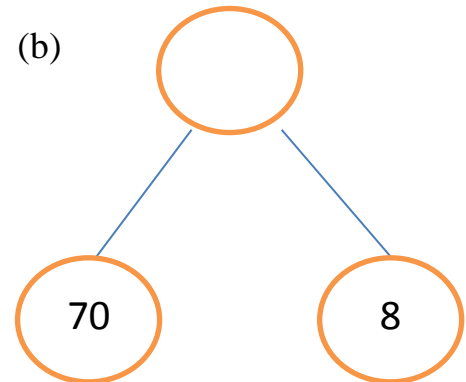


6. Complete the following.

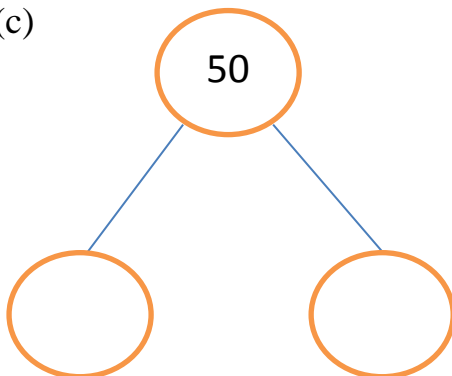
(a)



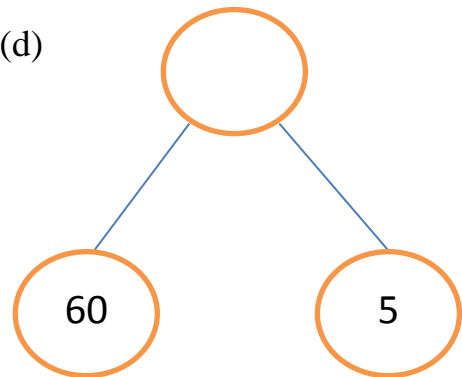
(b)



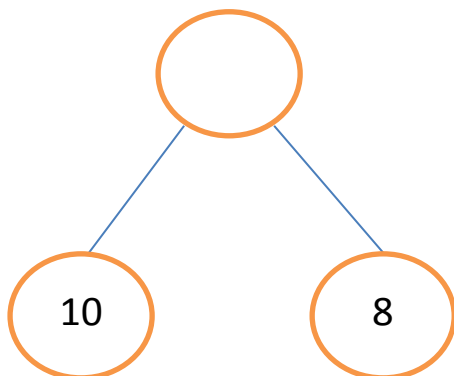
(c)



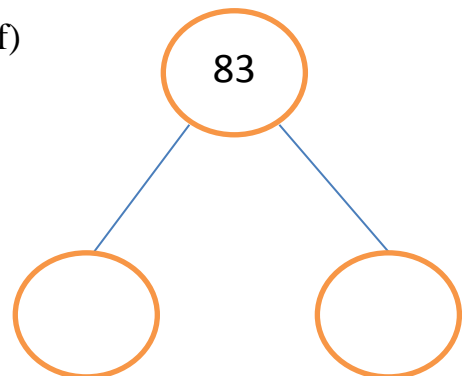
(d)



(e)



(f)



7. Write the correct numeral in the space provided.

- (a) 11 is \_\_\_\_\_ ten and \_\_\_\_\_ unit.
- (b) \_\_\_\_\_ is 1 ten and 7 units.
- (c) 73 is \_\_\_\_\_ more than 70.
- (d) 99 is \_\_\_\_\_ tens and \_\_\_\_\_ units.
- (e) \_\_\_\_\_ is 5 tens and 5 units.
- (f) 22 is \_\_\_\_\_ more than 20.
- (g) 43 is \_\_\_\_\_ tens and \_\_\_\_\_ units.
- (h) \_\_\_\_\_ is 8 tens and 0 unit.
- (i) 65 is \_\_\_\_\_ more than 60.


8. Write the number names.

- a. 52 \_\_\_\_\_
- b. 44 \_\_\_\_\_
- c. 38 \_\_\_\_\_
- d. 91 \_\_\_\_\_
- e. 72 \_\_\_\_\_
- f. 25 \_\_\_\_\_

9. Write the missing numerals.

- (a) 10, \_\_\_\_, \_\_\_\_, 13, 14, \_\_\_\_, \_\_\_\_, 17.
- (b) 22, \_\_\_\_, \_\_\_\_, 25, \_\_\_\_, \_\_\_\_, 28, \_\_\_\_, 30
- (c) 53, \_\_\_\_, 55, \_\_\_\_, \_\_\_\_, \_\_\_\_, 59, \_\_\_\_.
- (d) 78, \_\_\_\_, \_\_\_\_, 81, \_\_\_\_, 83, \_\_\_\_, 85, \_\_\_\_, 87.

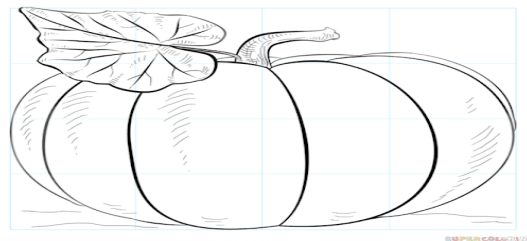
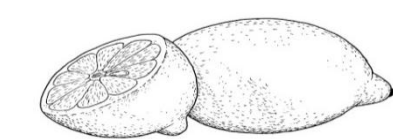
10 (a) Tick the longer bread.



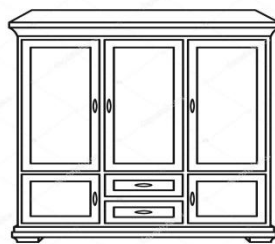

(b) Colour the longer stick brown.



11. Colour the heavier item.



12. Circle the lighter object.



13. Cross the lighter animal.



